

Output 8: RPL/APL resources for Boats

Recognising Prior Learning (RPL)

Guidance: Multiple Choice

This series of **multiple-choice questions** have been designed so as there is only one possible correct and complete response. This allows prior knowledge to be established through pre-testing, using Response Tools.

Taxonomy: Subject, Bank number, Question title

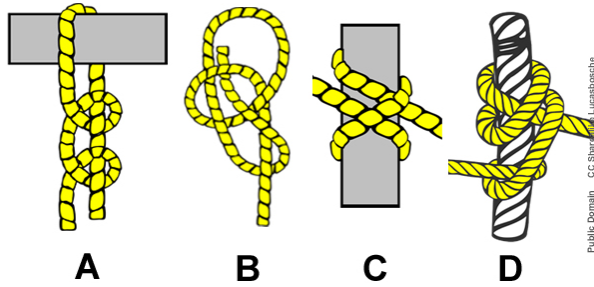
Subject : K = Knots for boats

Banks : Questions of equal weighting asking for the same knowledge/understanding but in a different way over a range of applications.

HC1Y 04 Prepare and operate small craft

KU6 Knots Knowledge Questions

Title: SC Bank 1 KU6 Round turn Use1 MC

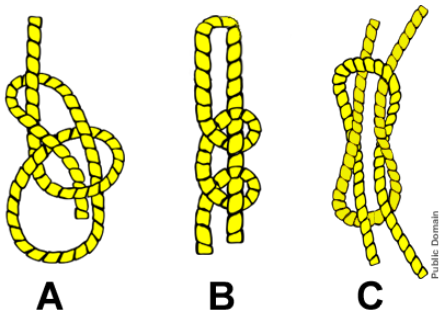


1) You need to tie your boat to a **MOORING POST** to unload items but quickly move on to the next job. The boat will be rocking up and down in the water.

Which **ONE** of these knots are you going to use?

- *a) A
- b) B
- c) C
- d) D

Title: SC Bank 2 KU6 Bowline ID1 CLOZE

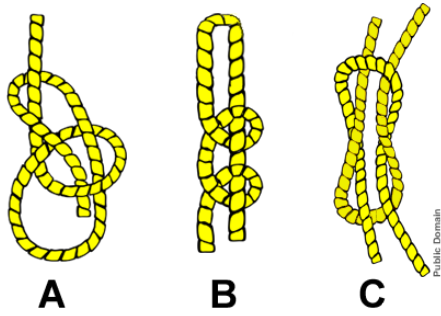


2) Identify the **Bowline** knot.

Type in the letter identifying the knot in the box below.

Answer: A

Title: SC Bank 2 KU6 Bowline ID2 MC



3) Identify the Bowline knot.

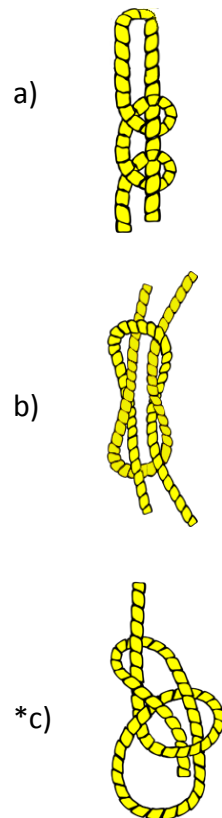
Select ONE.

- *a) A
- b) B
- c) C

Title: SC Bank 2 KU6 Bowline ID3 MC

4) Identify the Bowline knot.

Select one.



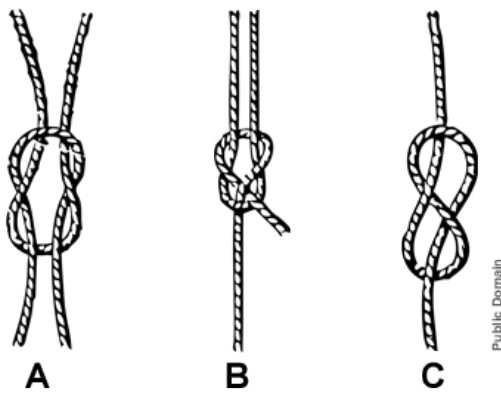
Title: SC Bank 3 KU6 Bowline Use1 MC

5) You have to tow a small boat back from the cages.

Which ONE of these knots will you use to attach this boat to yours?

- a) Round turn and two half hitches
- b) Rolling hitch
- c) Sheet bend
- *d) Bowline

Title: SC Bank 4 KU6 Sheet Use1 Type in

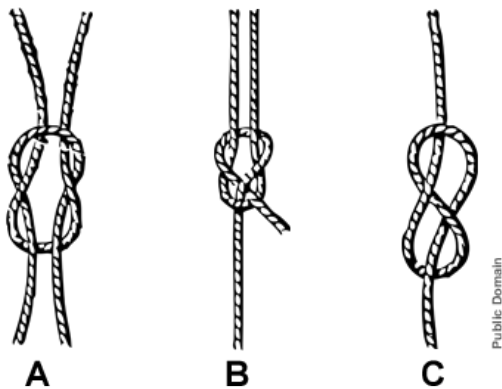


6) Which ONE of these knots would you use to join two lines of different diameter. The knot will be under strain but not jerked.

Type in the letter identifying the knot in the box below.

Answer: B

Title: SC Bank 4 KU6 Sheet Use2 MC

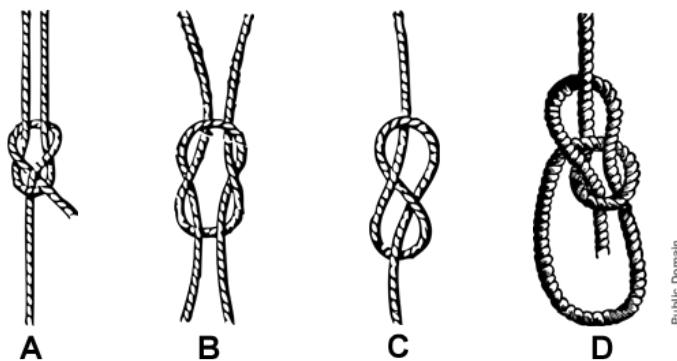


7) Which ONE of these knots would you use to join two lines of different diameter. The knot will be under strain but not jerked.

Select one.

- a) A
- *b) B
- c) C

Title: SC Bank 5 KU6 Sheet ID1 MC

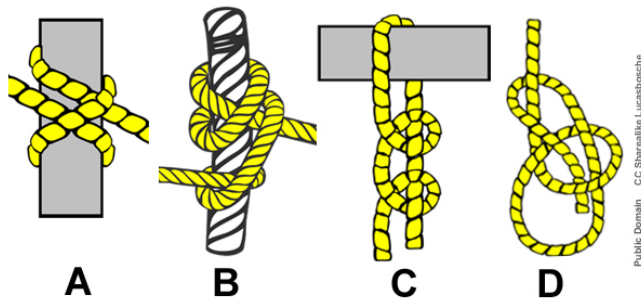


8) Identify the sheet bend.

Select one.

- *a) A
- b) B
- c) C
- d) D

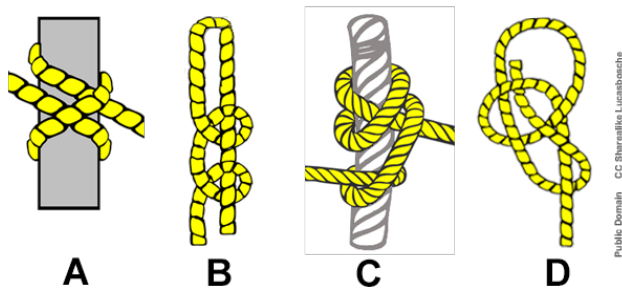
Title: SC Bank 6 KU6 Rolling hitch ID1 MC



9) Which ONE of these knots is a rolling hitch?

- a) A
- *b) B
- c) C
- d) D

Title: SC Bank 7 KU6 Rolling hitch Use1 MC



10) You have to tow a length of feed pipe out to the cages.

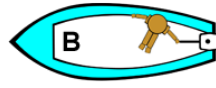
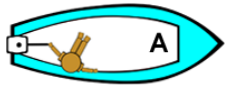
Which ONE of these knots will you use for this task?

- a) A
- b) B
- *c) C
- d) D

HC1Y 04 Prepare and operate small craft

KU8 Rules for safe operation Questions

Title: SC Bank1 KU8 Head On1 MC

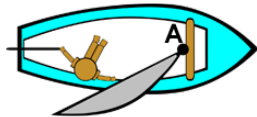


11) You are in charge of powerboat B.

What course of action should each powerboat take if on a head-on collision course with another powered vessel of a similar size?

- a) You should both give way, turning your boats to port.
- *b) You should both give way, turning your boats to starboard.
- c) Maintain your course, the boat on the left (boat A) should give way.
- d) Boat A should turn vessel to port. You should manoeuvre your boat B to starboard.

Title: SC Bank2 KU8 Head On Sail1 MC

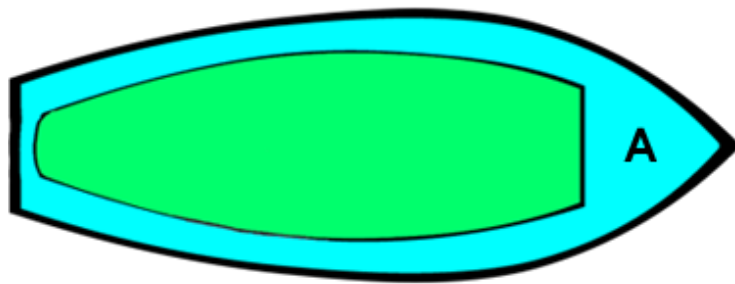


12) Boat A is a sailing vessel. You are in charge of powerboat B.

What course of action should each boat take if on a head-on collision course?

- *a) Boat A maintains course. You should give way, turning your boat to starboard.
- b) Boat A maintains course. You should give way, turning your boat to port .
- c) Maintain your course, sailing boats give way to power boats.
- d) You should both give way, turning your boats to starboard.
- e) You should both give way, turning your boats to port.

Title: SC Bank3 KU8 Head On Fishing1 MC



Public Domain

13) Boat A is a fishing vessel, actively fishing. You are in charge of powerboat B.

What course of action should each boat take if on a head-on collision course?

- a) You should both give way, turning your boats to port.
- b) You should both give way, turning your boats to starboard.
- c) Maintain your course, larger boats give way to smaller boats.
- d) Boat A maintains course. You should give way, turning your boat to port.
- *e) Boat A maintains course. You should give way, turning your boat to starboard.

Title: SC Bank4 KU8 Head On Ferry1 (Open type in – not automatically marked.)

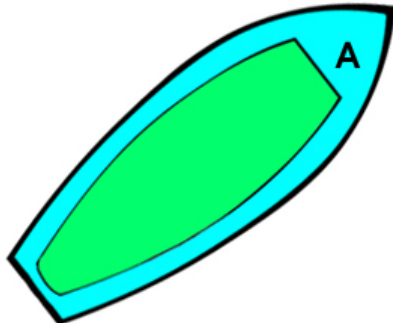


Image CC0 Public Domain

4) Boat A is the local ferry. You are in charge of powerboat B.

You are approaching boat A at an angle and are on a collision course.

Describe your course of action. Type into the box below.

ANSWER:

You are the give way vessel, and you either slow down or alter course to avoid the vessel and pass safely. In this situation the alteration does not necessarily have to be to starboard but the alteration should be clear to the stand b

HC1Y 04 Prepare and operate small craft

KU2 Terminology questions

Title: SC Bank 1 KU2 Bow1 Type in



14) Type in the number that indicates the BOW.

Answer: 1


Title: SC Bank 1 KU2 Bow2 MC



15) Which number indicates the BOW?

- *a) 1
- b) 2
- c) 3
- d) 4


Title: SC Bank 2 KU2 Port1 Type in



16) Type in the letter that indicates PORT.

Answer: c

Title: SC Bank 2 KU2 Port2 MC



17) Which letter indicates PORT?

- a) a
- b) b
- *c) c
- d) d

Title: SC Bank 3 KU2 Starboard1 Type in



18) Type in the number that indicates STARBOARD.

Answer: 3


Title: SC Bank 3 KU2 Starboard2 MC



19) Which number indicates STARBOARD?

- a) 1
- b) 2
- *c) 3
- d) 4


Title: SC Bank 4 KU2 Stern1 Type in



20) Type in the letter that indicates the STERN.

Answer: A


Title: SC Bank 4 KU2 Stern2 MC



21) Which letter indicates the STERN?

- *a) A
- b) B
- c) C
- d) D


Title: SC Bank 5 KU2 Painter1 Type in



22) Type in the number that indicates the PAINTER.

Answer: 4


Title: SC Bank 5 KU2 Painter2 MC



23) Which number indicates the PAINTER?

- a) 1
- b) 2
- c) 3
- *d) 4
- e) 5


Title: SC Bank 6 KU2 Gunwale1 Type in



24) Type in the letter that indicates the GUNWALE.

Answer: A

Title: SC Bank 6 KU2 Gunwale2 MC



25) Which letter indicates the GUNWALE?

- *a) A
- b) B
- c) C
- d) D
- e) E

Title: SC Bank 7 KU2 Freeboard1 MC

26) What term describes the distance from the water to the lowest point of the vessel where water could come on board?

- a) Beam
- b) Bilge
- c) Draft
- *d) Freeboard

Title: SC Bank 8 KU2 Cleat1 MC

27) What term describes a metal fitting on a boat on which a rope can be fastened?

- *a) Cleat
- b) R - clip
- c) Rowlock
- d) Thimble
- e) Pelican hook

Title: SC Bank 9 KU2 Astern1 MC

28) If you are asked to go astern, what are you being asked to do?

- a) Go forwards
- *b) Go in reverse
- c) Turn round and go back

Title: SC Bank 10 KU2 Beam1 MC

29) What term describes the maximum width of a vessel?

- *a) Beam
- b) Bilge
- c) Draft
- d) Bulkhead

Title: SC Bank 11 KU2 Hull1 MC

30) What term describes the body of the vessel?

- *a) Hull
- b) Deck
- c) Gunwale
- d) Bulkhead